

Chapter Four: Motion in Two Dimensions

SOLUTIONS TO PROBLEMS

P4.17 (a) $x_f = v_{xi}t = 8.00 \cos 20.0^\circ (3.00) = \boxed{22.6 \text{ m}}$

(b) Taking y positive downwards,

$$y_f = v_{yi}t + \frac{1}{2}gt^2$$

$$y_f = 8.00 \sin 20.0^\circ (3.00) + \frac{1}{2}(9.80)(3.00)^2 = \boxed{52.3 \text{ m}}$$

(c) $10.0 = 8.00(\sin 20.0^\circ)t + \frac{1}{2}(9.80)t^2$

$$4.90t^2 + 2.74t - 10.0 = 0$$

$$t = \frac{-2.74 \pm \sqrt{(2.74)^2 + 196}}{9.80} = \boxed{1.18 \text{ s}}$$

P4.29 $r = 0.500 \text{ m}$;

$$v_t = \frac{2\pi r}{T} = \frac{2\pi(0.500 \text{ m})}{\frac{60.0 \text{ s}}{200 \text{ rev}}} = 10.47 \text{ m/s} = \boxed{10.5 \text{ m/s}}$$

$$a = \frac{v^2}{R} = \frac{(10.47)^2}{0.5} = \boxed{219 \text{ m/s}^2 \text{ inward}}$$

P4.34 (a) $a_t = \boxed{0.600 \text{ m/s}^2}$

(b) $a_r = \frac{v^2}{r} = \frac{(4.00 \text{ m/s})^2}{20.0 \text{ m}} = \boxed{0.800 \text{ m/s}^2}$

(c) $a = \sqrt{a_t^2 + a_r^2} = \boxed{1.00 \text{ m/s}^2}$

$$\theta = \tan^{-1} \frac{a_r}{a_t} = \boxed{53.1^\circ \text{ inward from path}}$$

P4.38 (a) $\mathbf{v}_H = 0 + \mathbf{a}_H t = (3.00\hat{\mathbf{i}} - 2.00\hat{\mathbf{j}}) \text{ m/s}^2 (5.00 \text{ s})$

$$\mathbf{v}_H = (15.0\hat{\mathbf{i}} - 10.0\hat{\mathbf{j}}) \text{ m/s}$$

$$\mathbf{v}_J = 0 + \mathbf{a}_J t = (1.00\hat{\mathbf{i}} + 3.00\hat{\mathbf{j}}) \text{ m/s}^2 (5.00 \text{ s})$$

$$\mathbf{v}_J = (5.00\hat{\mathbf{i}} + 15.0\hat{\mathbf{j}}) \text{ m/s}$$

$$\mathbf{v}_{HJ} = \mathbf{v}_H - \mathbf{v}_J = (15.0\hat{\mathbf{i}} - 10.0\hat{\mathbf{j}} - 5.00\hat{\mathbf{i}} - 15.0\hat{\mathbf{j}}) \text{ m/s}$$

$$\mathbf{v}_{HJ} = (10.0\hat{\mathbf{i}} - 25.0\hat{\mathbf{j}}) \text{ m/s}$$

$$|\mathbf{v}_{HJ}| = \sqrt{(10.0)^2 + (25.0)^2} \text{ m/s} = \boxed{26.9 \text{ m/s}}$$

P4.50 (a) $y_f = (\tan \theta_i)(x_f) - \frac{g}{2 v_i^2 \cos^2 \theta_i} x_f^2$

Setting $x_f = d \cos \phi$, and $y_f = d \sin \phi$, we have

$$d \sin \phi = (\tan \theta_i)(d \cos \phi) - \frac{g}{2 v_i^2 \cos^2 \theta_i} (d \cos \phi)^2.$$

Solving for d yields, $d = \frac{2 v_i^2 \cos \theta_i [\sin \theta_i \cos \phi - \sin \phi \cos \theta_i]}{g \cos^2 \phi}$

or $d = \boxed{\frac{2 v_i^2 \cos \theta_i \sin(\theta_i - \phi)}{g \cos^2 \phi}}$.

(b) Setting $\frac{dd}{d\theta_i} = 0$ leads to $\theta_i = 45^\circ + \frac{\phi}{2}$ and $d_{\max} = \boxed{\frac{v_i^2(1 - \sin \phi)}{g \cos^2 \phi}}$.

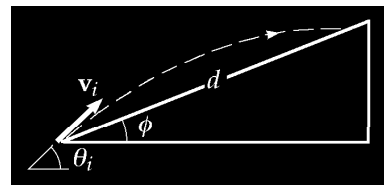


FIG. P4.50

Chapter Five: The Laws of Motion

SOLUTIONS TO PROBLEMS

P5.6 (a) Let the x -axis be in the original direction of the molecule's motion.

$$v_f = v_i + at: \quad -670 \text{ m/s} = 670 \text{ m/s} + a(3.00 \times 10^{-13} \text{ s})$$

$$a = \boxed{-4.47 \times 10^{15} \text{ m/s}^2}$$

(b) For the molecule, $\sum \mathbf{F} = m\mathbf{a}$. Its weight is negligible.

$$\mathbf{F}_{\text{wall on molecule}} = 4.68 \times 10^{-26} \text{ kg}(-4.47 \times 10^{15} \text{ m/s}^2) = -2.09 \times 10^{-10} \text{ N}$$

$$\mathbf{F}_{\text{molecule on wall}} = \boxed{+2.09 \times 10^{-10} \text{ N}}$$

P5.16 $v_x = \frac{dx}{dt} = 10t$, $v_y = \frac{dy}{dt} = 9t^2$

$$a_x = \frac{dv_x}{dt} = 10$$
, $a_y = \frac{dv_y}{dt} = 18t$

At $t = 2.00 \text{ s}$, $a_x = 10.0 \text{ m/s}^2$, $a_y = 36.0 \text{ m/s}^2$

$$\sum F_x = ma_x: \quad 3.00 \text{ kg}(10.0 \text{ m/s}^2) = 30.0 \text{ N}$$

$$\sum F_y = ma_y: \quad 3.00 \text{ kg}(36.0 \text{ m/s}^2) = 108 \text{ N}$$

$$\sum F = \sqrt{F_x^2 + F_y^2} = \boxed{112 \text{ N}}$$

P5.18 $T_3 = F_g$ (1)

$T_1 \sin \theta_1 + T_2 \sin \theta_2 = F_g$ (2)

$T_1 \cos \theta_1 = T_2 \cos \theta_2$ (3)

Eliminate T_2 and solve for T_1

$$T_1 = \frac{F_g \cos \theta_2}{(\sin \theta_1 \cos \theta_2 + \cos \theta_1 \sin \theta_2)} = \frac{F_g \cos \theta_2}{\sin(\theta_1 + \theta_2)}$$

$$T_3 = F_g = \boxed{325 \text{ N}}$$

$$T_1 = F_g \left(\frac{\cos 25.0^\circ}{\sin 85.0^\circ} \right) = \boxed{296 \text{ N}}$$

$$T_2 = T_1 \left(\frac{\cos \theta_1}{\cos \theta_2} \right) = 296 \text{ N} \left(\frac{\cos 60.0^\circ}{\cos 25.0^\circ} \right) = \boxed{163 \text{ N}}$$

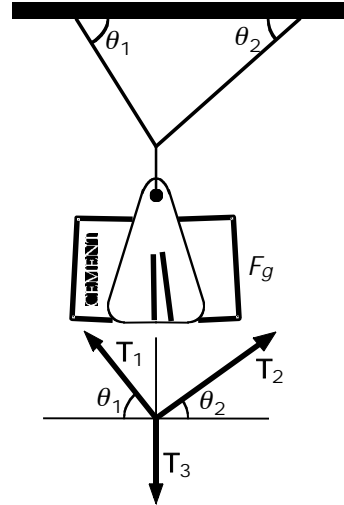


FIG. P5.18

P5.21 (a) Isolate either mass

$$T + mg = ma = 0$$

$$|T| = |mg|.$$

The scale reads the tension T ,

so

$$T = mg = 5.00 \text{ kg}(9.80 \text{ m/s}^2) = \boxed{49.0 \text{ N}}.$$

(b) Isolate the pulley

$$\mathbf{T}_2 + 2\mathbf{T}_1 = \mathbf{0}$$

$$T_2 = 2|T_1| = 2mg = \boxed{98.0 \text{ N}}.$$

(c) $\sum \mathbf{F} = \mathbf{n} + \mathbf{T} + \mathbf{mg} = \mathbf{0}$

Take the component along the incline

$$\mathbf{n}_x + \mathbf{T}_x + \mathbf{mg}_x = 0$$

or

$$0 + T - mg \sin 30.0^\circ = 0$$

$$T = mg \sin 30.0^\circ = \frac{mg}{2} = \frac{5.00(9.80)}{2}$$

$$= \boxed{24.5 \text{ N}}.$$

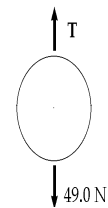


FIG. P5.21(a)

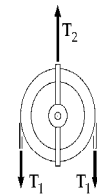


FIG. P5.21(b)

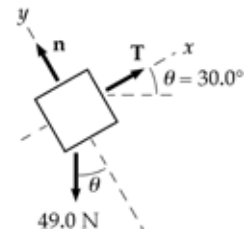


FIG. P5.21(c)

P5.40 $m_{\text{suitcase}} = 20.0 \text{ kg}$, $F = 35.0 \text{ N}$

$$\begin{aligned}\sum F_x = ma_x: & -20.0 \text{ N} + F \cos \theta = 0 \\ \sum F_y = ma_y: & +n + F \sin \theta - F_g = 0\end{aligned}$$

(a) $F \cos \theta = 20.0 \text{ N}$

$$\cos \theta = \frac{20.0 \text{ N}}{35.0 \text{ N}} = 0.571$$

$$\boxed{\theta = 55.2^\circ}$$

(b) $n = F_g - F \sin \theta = [196 - 35.0(0.821)] \text{ N}$

$$\boxed{n = 167 \text{ N}}$$

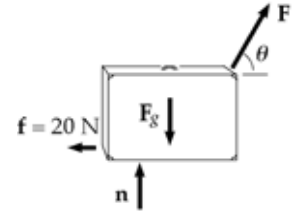


FIG. P5.40